



๒ เติมจำนวนใน

		$1 + 1 = 2$
---	---	-------------



		$1 + 2 = 3$
---	---	-------------



		$1 + 3 = 4$
---	---	-------------



		$1 + 4 = 5$
--	--	-------------

		$1 + 5 = 6$
---	---	-------------

		$1 + 6 = 7$
---	---	-------------






		$1 + 7 = 8$
---	---	-------------

		$1 + 8 = 9$
---	---	-------------

		$1 + 9 = 10$
---	--	--------------



๓ เขียนประโยคสัญลักษณ์การบวกจากสถานการณ์ที่กำหนด

<p>1)</p> 	
<p>2)</p> 	
<p>3)</p> 	
<p>4)</p> 	
<p>5)</p> 	

$$4 + 3 = 7$$

$$2 + 3 = 5$$

$$4 + 5 = 9$$

$$4 + 4 = 8$$

$$5 + 2 = 7$$